

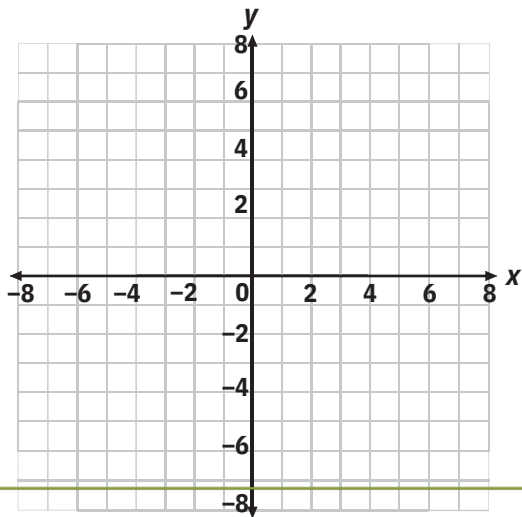
Graph Linear Functions Using Tables



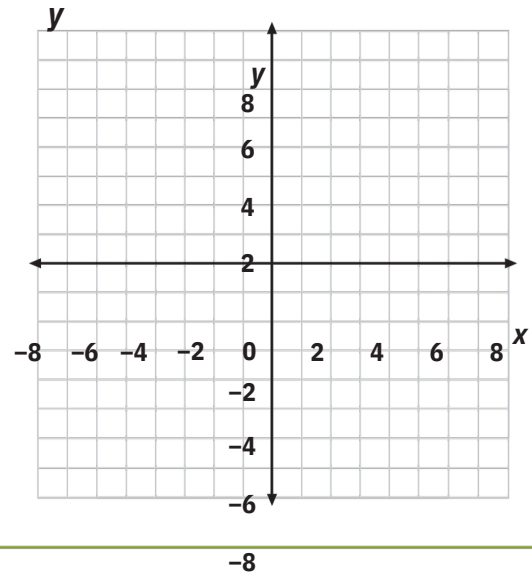
Each problem below gives a linear function in slope-intercept form. Fill in the y -values in each table by evaluating the function at each given x -value. Then graph the function by plotting the points and drawing a straight line connecting them.

$$y = 2x + 1$$

x	-2	-1	0	1	2
y					

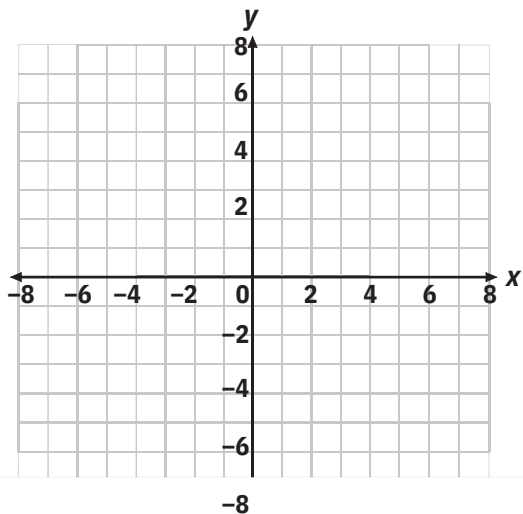


	$y = 3x - 2$				
x	-2	-1	0	1	2

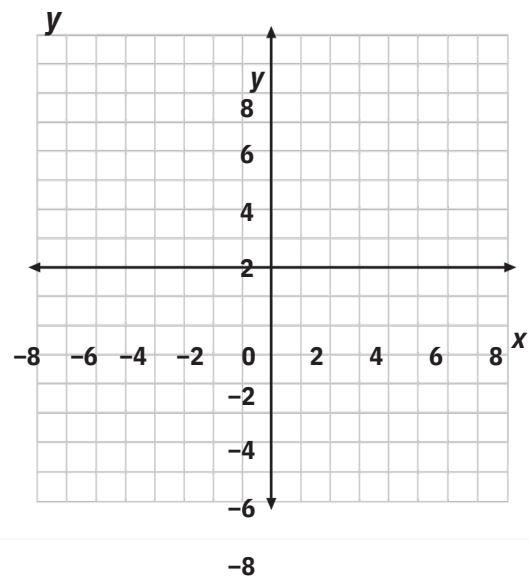


$$y = -x + 3$$

x	-4	-2	0	2	4
y					



	$y = -2x - 8$				
x	-8	-6	-4	-2	0



Graph Linear Functions Using Tables

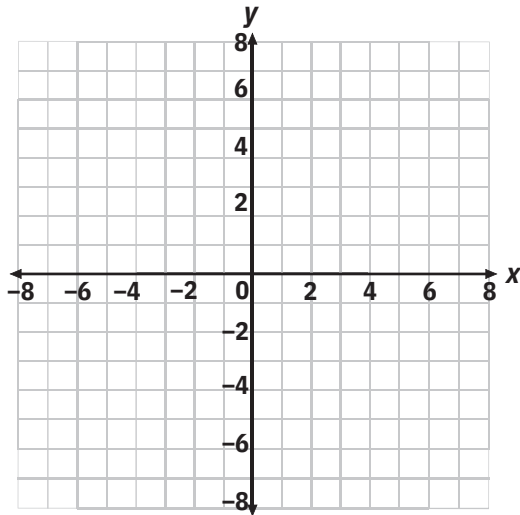
Keep going!

Fill in the y -values in each table by evaluating the function at each given x -value. Then graph the function by plotting the points and drawing a straight line connecting them.



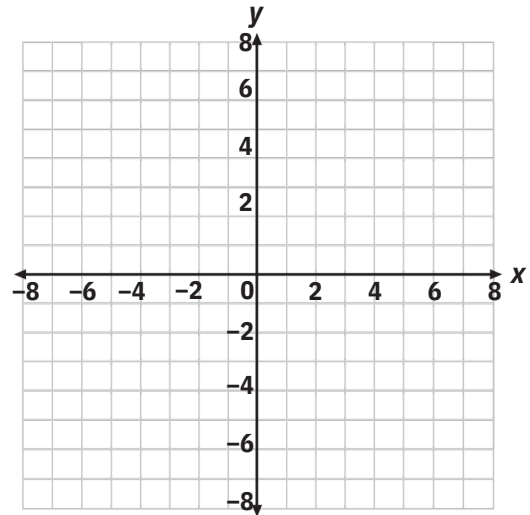
$$y = -\frac{1}{2}x - 5$$

x	-2	0	2	4	6
y					



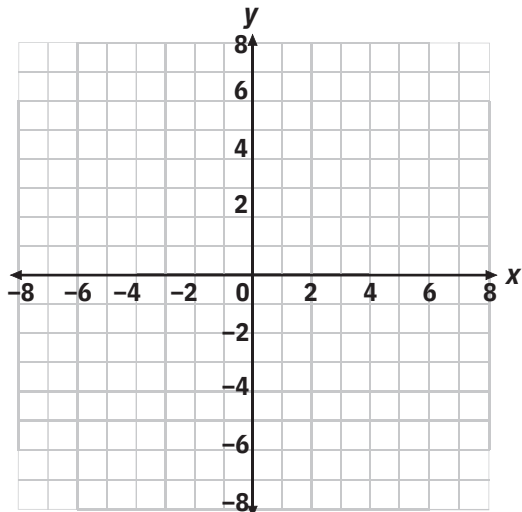
$$y = -\frac{2}{3}x + 2$$

x	-6	-3	0	3	6
y					



$$y = \frac{3}{2}x - 2$$

x	-4	-2	0	2	4
y					



$$y = -\frac{3}{4}x - 1$$



x	-8	-4	0	4	8
y					

